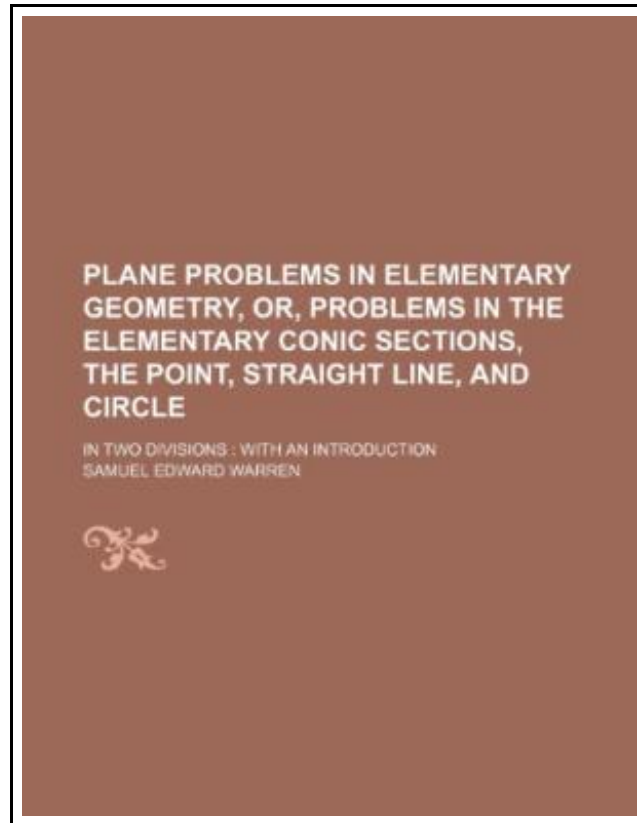


Plane Problems in Elementary Geometry, Or, Problems in the Elementary Conic Sections, the Point, Straight Line, and Circle In Two Divisions with an Introduction



Filesize: 3.13 MB

Reviews



Undoubtedly, this is the greatest job by any author. It is actually filled with wisdom and knowledge I am quickly could get a pleasure of reading a written book.
(Kade Ankunding)

PLANE PROBLEMS IN ELEMENTARY GEOMETRY, OR, PROBLEMS IN THE ELEMENTARY CONIC SECTIONS, THE POINT, STRAIGHT LINE, AND CIRCLE IN TWO DIVISIONS WITH AN INTRODUCTION



To read **Plane Problems in Elementary Geometry, Or, Problems in the Elementary Conic Sections, the Point, Straight Line, and Circle In Two Divisions with an Introduction** PDF, you should follow the button below and save the file or gain access to other information which are related to **PLANE PROBLEMS IN ELEMENTARY GEOMETRY, OR, PROBLEMS IN THE ELEMENTARY CONIC SECTIONS, THE POINT, STRAIGHT LINE, AND CIRCLE IN TWO DIVISIONS WITH AN INTRODUCTION** ebook.

RareBooksClub. Paperback. Book Condition: New. This item is printed on demand. Paperback. 38 pages. Dimensions: 9.7in. x 7.4in. x 0.1in. This historic book may have numerous typos and missing text. Purchasers can download a free scanned copy of the original book (without typos) from the publisher. Not indexed. Not illustrated. 1871 Excerpt: . . . of this radius will be three points, through which the circle can be drawn. 83. From these principles follow the tables below, which include the fundamental problems already given. The problems of a straight line through two explicit points, and of a circle through three such points, are omitted, as they are not problems of tangency. a. --Tangent Straight Lines. Prob. 52. To draw a Tangent at a given point, on a circle whose centre is known. The solution here given is a useful application of Prob. 43. Thus 1st. Lay off the radius AC, each way from A, and on the circumference. 2d. Through C, and the points p and q thus found, draw indefinite lines, not shown. 3d. From p and q as centres, and radius, AC, of the given circle, draw arcs, and note their intersections with the lines just described. 4th. Join the points thus found, by a straight line, and it will be the required tangent at A. Principles. --These will be perfectly obvious on making the construction. Prob. 53. To draw a Tangent at a given point, on a circle whose centre is not known. Fig. 48. Let abc, Fig. 48, be the circle, and T the given point. Take any arc, Ta, on one side of T, and a double arc, Tc, on the other side. Draw cad, making ad equal to Ta. Then dT will be the tangent required. Remark. --By finding the centre, and drawing the radii...

-  [Read Plane Problems in Elementary Geometry, Or, Problems in the Elementary Conic Sections, the Point, Straight Line, and Circle In Two Divisions with an Introduction Online](#)
-  [Download PDF Plane Problems in Elementary Geometry, Or, Problems in the Elementary Conic Sections, the Point, Straight Line, and Circle In Two Divisions with an Introduction](#)

You May Also Like



[PDF] Animalogy: Animal Analogies

Click the web link under to download and read "Animalogy: Animal Analogies" document.

[Save PDF »](#)



[PDF] Yearbook Volume 15

Click the web link under to download and read "Yearbook Volume 15" document.

[Save PDF »](#)



[PDF] Molly on the Shore, BFMS 1 Study score

Click the web link under to download and read "Molly on the Shore, BFMS 1 Study score" document.

[Save PDF »](#)



[PDF] Good Night, Zombie Scary Tales

Click the web link under to download and read "Good Night, Zombie Scary Tales" document.

[Save PDF »](#)



[PDF] God Loves You. Chester Blue

Click the web link under to download and read "God Loves You. Chester Blue" document.

[Save PDF »](#)



[PDF] When Santa Claus Prayed

Click the web link under to download and read "When Santa Claus Prayed" document.

[Save PDF »](#)